

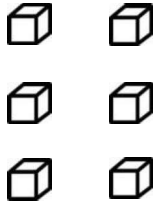
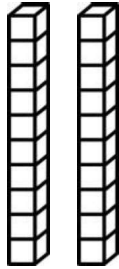
Name _____



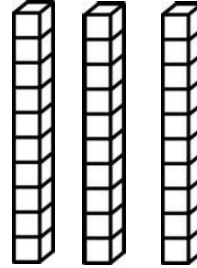
Add. Then draw blocks to check your answer.

$$26 + 32 = 58$$

26
+ 32
—
58



+



$$75 + 11 =$$

--

$$54 + 13 =$$

--

$$65 + 32 =$$

--