

A

EMOJI MATH

REGROUPING math menu

NAME: _____

Use the emoji key below to solve the math puzzles!

$$\text{😊} = 256$$

$$\text{😜} = 318$$

$$\text{😎} = 744$$

$$\text{😍} = 589$$

$$\text{😊} = 921$$

$$\text{😁} = 118$$

A. $\text{😎} - \text{😁} =$

B. $\text{😊} - \text{😊} =$

C. $\text{😜} + \text{😎} =$

D. $\text{😁} + \text{😊} =$

E. $\text{😜} + \text{😁} + \text{😍} =$

F. $\text{😊} + \text{😜} - \text{😁} =$

G. $\text{😊} - \text{😍} + \text{😁} =$

H. $\text{😎} - \text{😍} =$

I. $\text{😊} + \text{😎} =$

J. $\text{😜} - \text{😁} =$

K. $\text{😎} + \text{😜} - \text{😍} =$

L. $\text{😊} - \text{😁} + \text{😍} =$

M. $\text{😊} - \text{😊} - \text{😍} =$

N. Create your own emoji problem to solve:


D WORD PROBLEMS

REGROUPING math menu

NAME: _____

Create your own word problems! Use the pictures to inspire your word problems.

A.




B.




C.




D.



E.



F.








E CRACK THE CODE



REGROUPING math menu

NAME: _____




Solve the logic puzzles and decode the value of each picture!



A.  +  +  = 416



 -  = 103

 -  = 44




Bird: 119 Giraffe: _____ Panda: _____



B.  +  +  = 1,410



 -  = 108

 -  = 585




Dog: 347 Frog: _____ Pig: _____



C.  +  +  = 1,345



 -  = 387

 +  = 836




Hippo: _____ Penguin: 509 Zebra: _____



D.  +  +  = 973



 -  = 318

 +  = 341




Koala: _____ Tiger: 27 Unicorn: _____




E.  +  +  = 1,166




 -  = 165




 +  = 722

Bunny: _____ Sloth: _____ Skunk: 113

F.  +  +  = _____

 +  +  = _____

 -  -  = _____



 -  -  = _____

WRITE A RAP

REGROUPING math menu

NAME: _____

Create a subtraction problem that uses regrouping in the box below. Then, write a rap on how to solve your subtraction problem.














H CREATE A COMIC

REGROUPING math menu

NAME: _____

Create a comic strip about an addition or subtraction sign (+ or -) who is going to work.




I MATH AT WORK

REGROUPING math menu

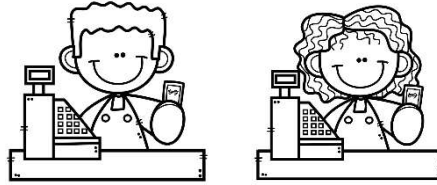
NAME: _____

How do you think these workers use addition and subtraction in their job? Write down as many things as you can think of.




CHEF

- _____
- _____
- _____
- _____
- _____
- _____
- _____




CASHIER

- _____
- _____
- _____
- _____
- _____
- _____
- _____




ASTRONAUT

- _____
- _____
- _____
- _____
- _____
- _____
- _____




TEACHER

- _____
- _____
- _____
- _____
- _____
- _____
- _____



VETERINARIAN

- _____
- _____
- _____
- _____
- _____
- _____
- _____



CONSTRUCTION WORKER

- _____
- _____
- _____
- _____
- _____
- _____
- _____